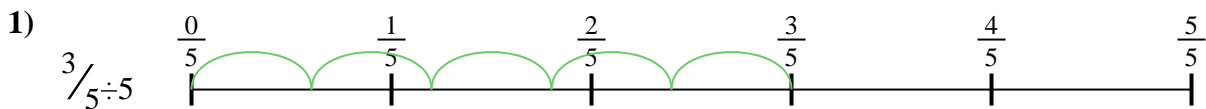


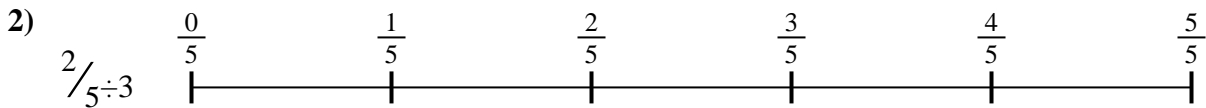


Use the numberline to solve each problem. The first is marked for you.

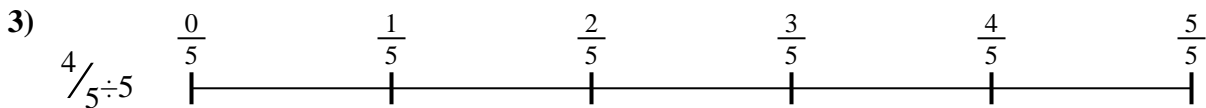
Answers




1. _____



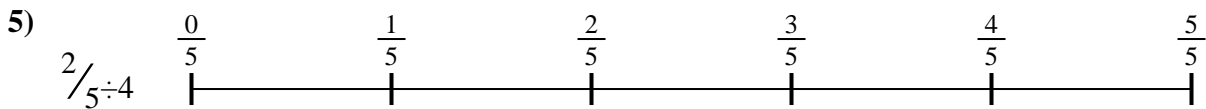
2. _____



3. _____



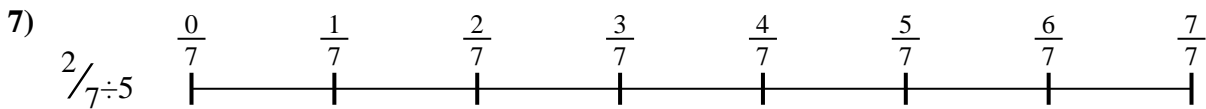
4. _____



5. _____



6. _____



7. _____



8. _____

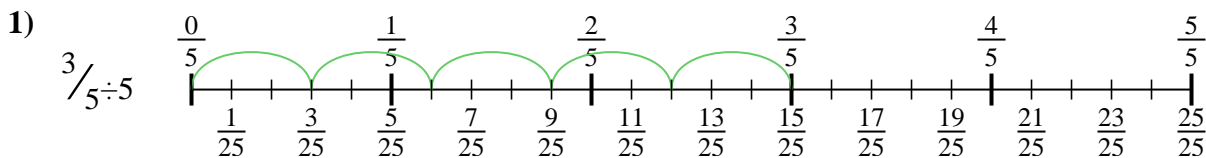


9. _____

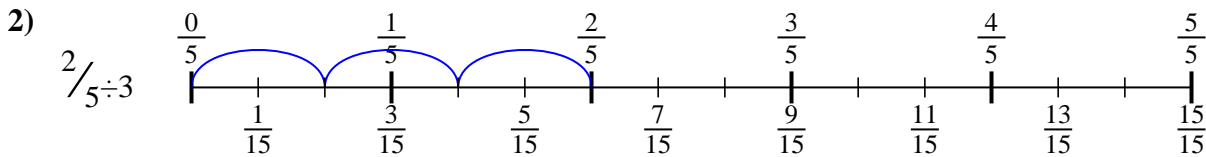


Use the numberline to solve each problem. The first is marked for you.

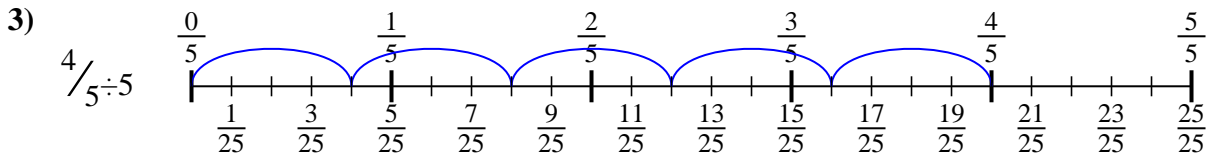
Answers



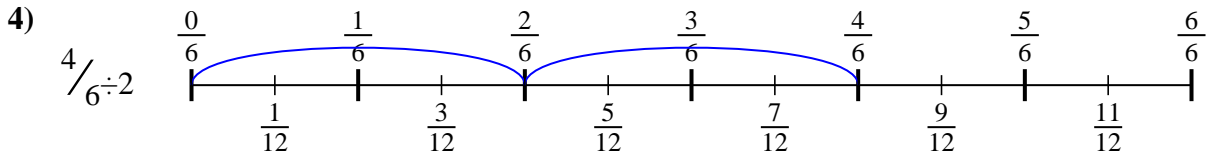
1. $\frac{3}{25}$



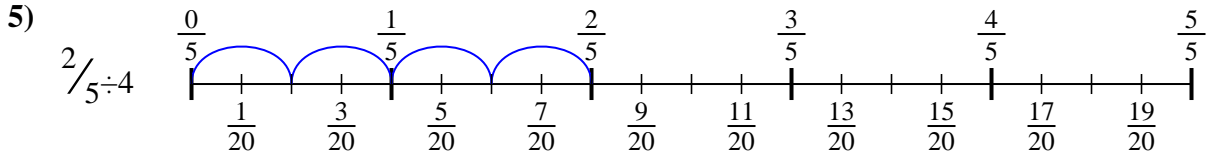
2. $\frac{2}{15}$



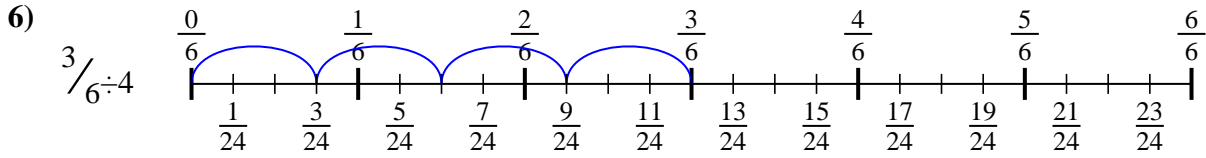
3. $\frac{4}{25}$



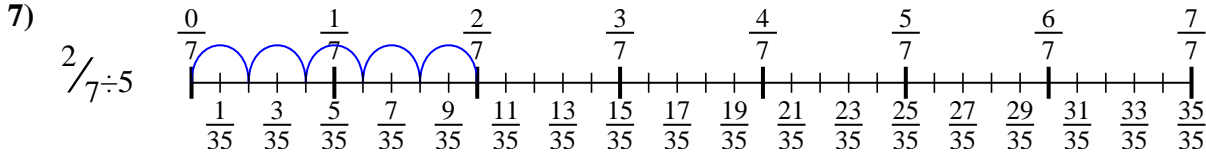
4. $\frac{4}{12}$



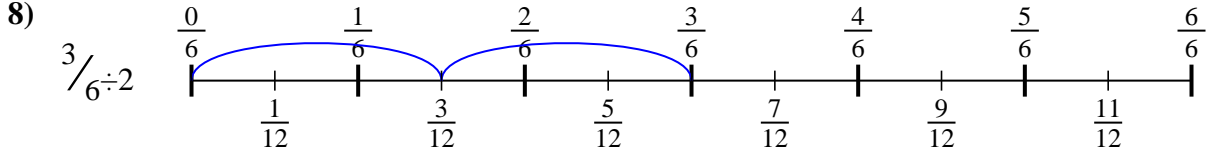
5. $\frac{2}{20}$



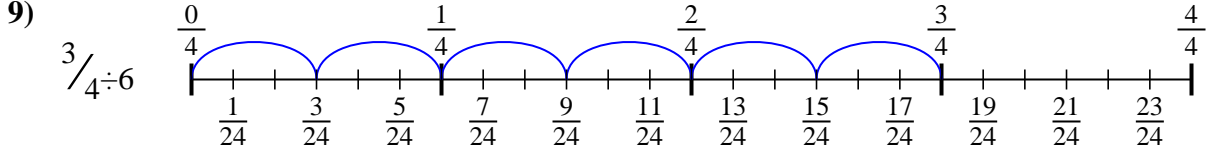
6. $\frac{3}{24}$



7. $\frac{2}{35}$



8. $\frac{3}{12}$



9. $\frac{3}{24}$



Use the numberline to solve each problem. The first is marked for you.

Answers

$3/25$

$3/24$

$2/20$

$3/24$

$4/12$

$3/12$

$4/25$

$2/15$

$2/35$

1. _____

2. _____

3. _____

4. _____

5. _____

6. _____

7. _____

8. _____

9. _____

1)

2)

3)

4)

5)

6)

7)

8)

9)